

Level One

## Addition - Sum to 10

1

Johnny has 4 green apples  
and 5 red apples in his basket.  
How many apples does  
Johnny have in all?



©2014

I.OA.1


©TeamKonechy2014

Level One

## Addition - Sum to 10

2

David caught 5 bugs in the  
grass. He caught 3 bugs on  
the dirt. How many bugs  
did he catch altogether?



I.OA.1

©TeamKonechy2014

Level One

## Addition - Sum to 10

3

There are 3 boys and 3 girls in the class. How many kids are there altogether?



I.O.A.1

©TeamKonechy2014

Level One

## Addition - Sum to 10

4

Susan picked 3 yellow flowers and 1 red flower. How many flowers did Susan pick in all?



I.O.A.1

©TeamKonechy2014

Level One

## Addition - Sum to 10

5

The clown sold 6 cotton candies. 3 were pink and the rest were blue. How many cotton candies were blue?



©2014  
I.O.A.1

©TeamKonechy2014

Level One

## Addition - Sum to 10

6

Sara has 10 pieces of gum. 5 sticks are pink and the other sticks are white. How many pieces of gum are white?



©2014  
I.O.A.1

©TeamKonechy2014

Level One

## Addition - Sum to 10

7

4 bananas are in the bag.  
Sam puts in 2 more bananas.  
How many bananas are  
there in all?



©TeamKonechy2014


1.OA.1

Level One

## Addition - Sum to 10

8

There are 6 penguins inside  
the igloo. 4 penguins are  
outside the igloo. How many  
penguins are there  
altogether?



©TeamKonechy2014


1.OA.1

Level One

## Addition - Sum to 10

9

My mom washed 7 boy shirts and 2 girl shirts. How many shirts did my mom wash altogether?



©TeamKonechy2014

I.O.A.I

Level One

## Addition - Sum to 10

10

Mrs. Smart has 8 pencils. 4 of her pencils are sharp. The other pencils are broken. How many broken pencils does Mrs. Smart have in all?



©TeamKonechy2014

I.O.A.I

Level One

# Addition - Sum to 10

|        |        |        |        |         |
|--------|--------|--------|--------|---------|
| Task 1 | Task 2 | Task 3 | Task 4 | Task 5  |
| Task 6 | Task 7 | Task 8 | Task 9 | Task 10 |

# Addition - Sum to 10

|   |   |   |   |  |
|---|---|---|---|--|
| <p>Task 1</p> $\begin{array}{r} \square \\ + \square \\ \hline \end{array}$ | <p>Task 2</p> $\begin{array}{r} \square \\ + \square \\ \hline \end{array}$ | <p>Task 3</p> $\begin{array}{r} \square \\ + \square \\ \hline \end{array}$ | <p>Task 4</p> $\begin{array}{r} \square \\ + \square \\ \hline \end{array}$ | <p>Task 5</p> $\begin{array}{r} \square \\ + \square \\ \hline \end{array}$  |
| <p>Task 6</p> $\begin{array}{r} \square \\ + \square \\ \hline \end{array}$ | <p>Task 7</p> $\begin{array}{r} \square \\ + \square \\ \hline \end{array}$ | <p>Task 8</p> $\begin{array}{r} \square \\ + \square \\ \hline \end{array}$ | <p>Task 9</p> $\begin{array}{r} \square \\ + \square \\ \hline \end{array}$ | <p>Task 10</p> $\begin{array}{r} \square \\ + \square \\ \hline \end{array}$ |